

Name: \_\_\_\_\_ Date: \_\_\_\_\_

Directions: Look at each figure. Write the fraction that represents the shaded area in each figure.

1.




\_\_\_\_\_

2.



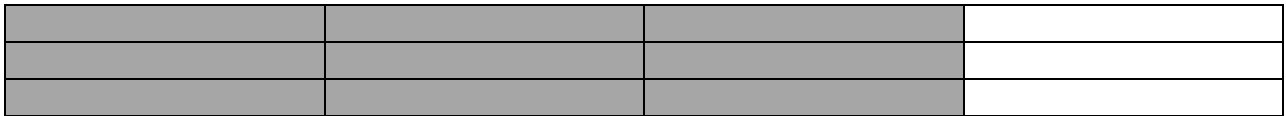
\_\_\_\_\_

3.



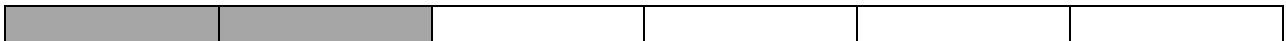
\_\_\_\_\_

4.




\_\_\_\_\_

5.



\_\_\_\_\_

6.



\_\_\_\_\_

Name: \_\_\_\_\_ Date: \_\_\_\_\_

## Answer Sheet

1.  $\frac{1}{2}$

2.  $\frac{6}{8}$

3.  $\frac{2}{4}$

4.  $\frac{9}{12}$

5.  $\frac{2}{6}$

6.  $\frac{6}{16}$